

Geography

Week 6



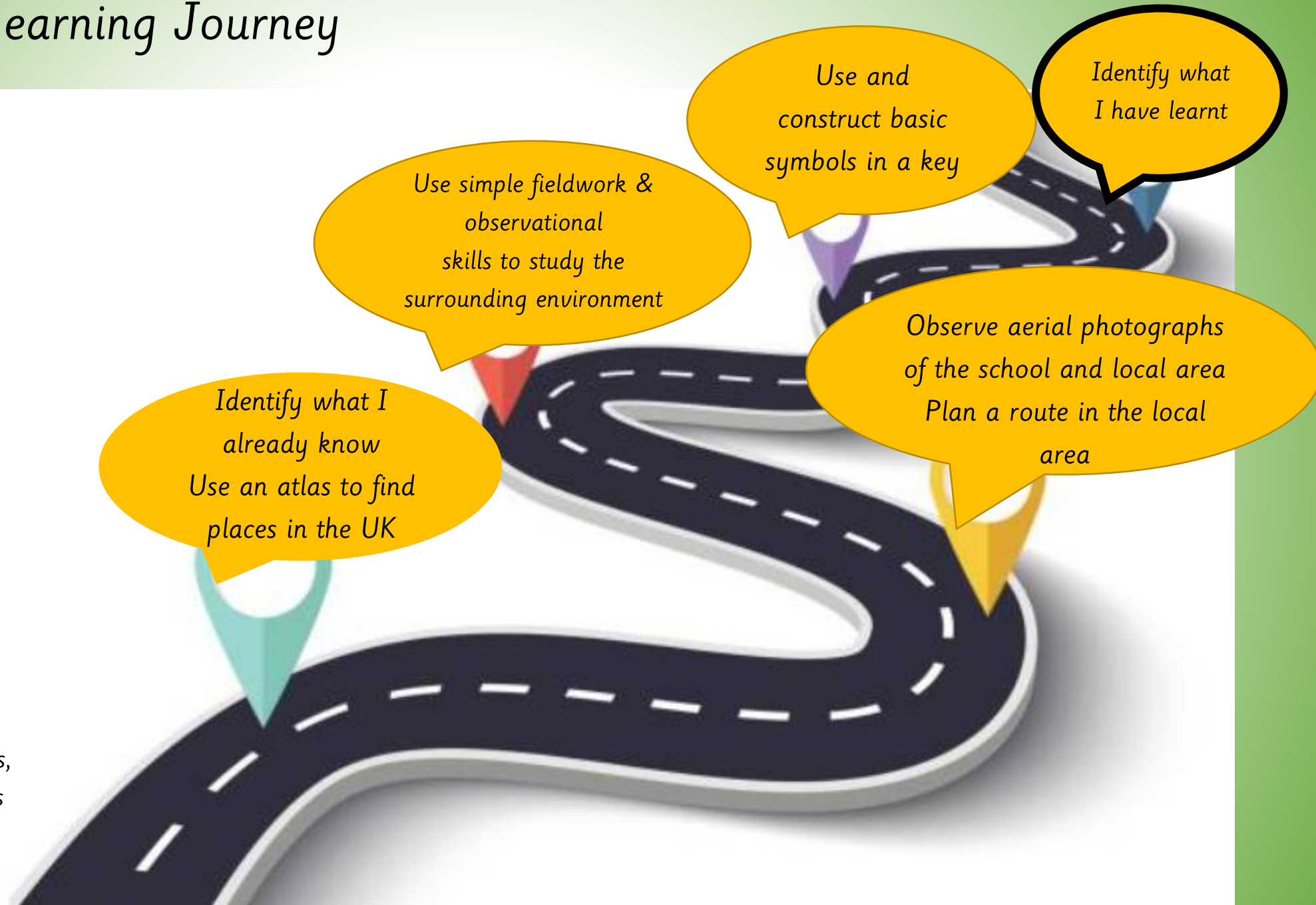
LQ: Can I identify what I have learnt?

We are geographers.

*Geographers are special type of scientists
that study the earth, land and people.*



Our Geography Learning Journey



Key vocabulary:

town, map, location, aerial, physical, features, local, compass, landmarks, key, features, symbols

Monday 23rd March 2026



LQ: Can I identify what I have learnt?

Steps to Success

All: I know how to use compass and a map.

Most: I know directional and positional language.

Some: I understand how to devise a map and navigate a friend to a specific place.



★ STAR WORDS ★

School



Needle



compass



key

-  Bus stop
-  Telephone
-  Park
-  Litter Bin
-  Traffic lights
-  Parking

Right



Turning left



South



QUIZ TIME!

Question 1

Sam wants to know which direction is north. He should use a _____ to find out which way is north.

a

Clock

b

Compass

c

Timer



Hide
Answers

QUIZ TIME!

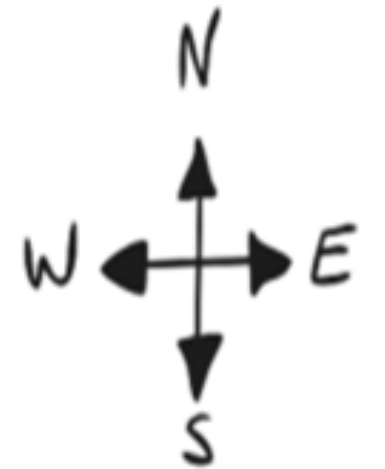
Question 2

Which way is north on a map?

a Top

b Middle.

c Back



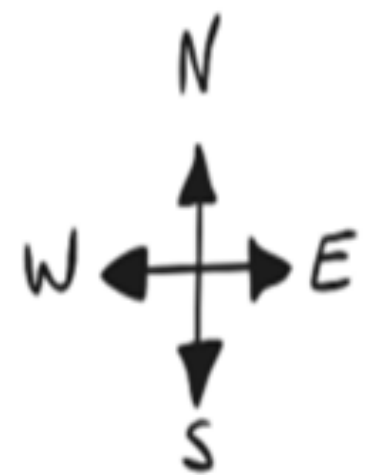
Hide
Answers

QUIZ TIME!

Question 3

What is the opposite of north?

- a** West
- b** East
- c** South



Hide
Answers

QUIZ TIME!

Question 4

Which way on a map is west?

C

To the left-hand side

b

To the right-hand side

C

Straight down



Hide Answers

QUIZ TIME!

Question 5

What is the opposite of turning right?

a Going straight on

c Turning left

c Going backwards



Hide
Answers

QUIZ TIME!

Question 6

What tells you the meaning of the symbols on a map?

a

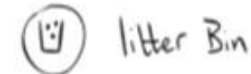
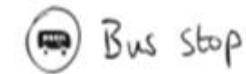
A lock

b

A dictionary

c

A key



Hide
Answers

QUIZ TIME!

Question 7

What does a knife and fork mean on a map?

a A school

b A knife and fork shop

c A restaurant



Hide
Answers

LQ: Can I identify what I have learnt?

TASK - Assessment

Now answer these questions in your books.
Remember to use the star words to help you!

Self Assessment

Do you understand what to do?



Questions:

1. What would you use to find the direction of north?
2. What is the opposite of north?
3. Which way on a map is east?
4. What is the opposite of turning right?
5. What tells you the meaning of symbols on a map?
6. What does a hat symbol represent?
7. What is the name of the dial on a compass?

★ STAR WORDS ★

School




Needle



compass



key



Right



Turning left



South



Assessment

- *All: I know what compasses and map are.*
 - *I know how to use a compass and a map.*
 - *Some: I understand how to devise a map using basic symbols.*
1. *What is a compass?*
 2. *What is a map?*
 3. *How do we use a compass?*
 4. *How do we use maps?*
 5. *Why are there symbols on a map?*
 6. *What do you need to include when drawing a map? Why?*